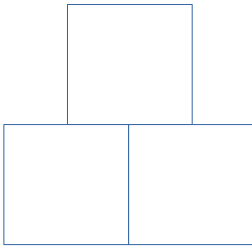
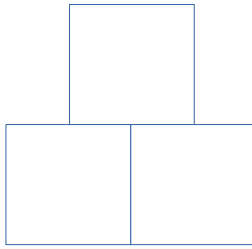
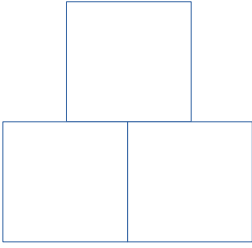
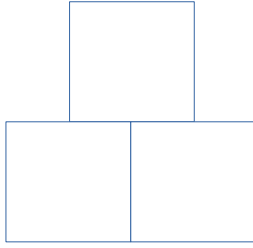











RAPPRESENTA L'OPERAZIONE SULLA PIRAMIDE

$8 + ? = 10$		$11 - ? = 8$	
$7 - ? = 5$		$12 - ? = 9$	
$6 + ? = 10$		$11 + ? = 20$	
$? + 7 = 11$		$? - 2 = 4$	
$? + 9 = 15$		$? + 13 = 17$	
$? + 11 = 18$		$? - 5 = 6$	
$? + 5 = 13$		$8 + ? = 15$	